



राष्ट्रीय डिज़ाइन संस्थान
NATIONAL INSTITUTE OF DESIGN

M.Des 2016 DAT Prelims Test Paper Part-1 CDAT

(Common Design Aptitude Test)



for answers, detailed explanations & 100+ student Sketches

edge.dqlabs.in | DQ Labs | 9591001000

PART-I. Questions 1 to 88 are multiple choice questions. The answers should be marked in the OMR answer sheet provided separately. Do not write your name anywhere in the booklet. This may lead to disqualification.

Question numbers 1 to 44 carry 0.5 marks each. Please read the questions carefully and select your response from the options provided.

- Q1. With reference to your current location, identify the city, which is located most eastward?
 (A) Singapore (B) Hongkong (C) Manila (D) Jakarta
- Q2. Which Indian sportsperson attained world rank number one (Singles title) in 2015?
 (A) Saina Nehwal (B) Sania Mirza
 (C) Jwala Gutta (D) Ashwini Ponappa
- Q3. What is the full form of EMI?
 (A) Equated Monthly Installments (B) Equal Money Installment
 (C) Equal Monthly Investments (D) Equated Money Investments
- Q4. If a human figure is standing in front of a full length rectangular concave mirror, how will her/his reflection look like?
 (A) Taller and thinner (B) Shorter and fatter
 (C) Taller and fatter (D) Shorter and thinner
- Q5. Name the states of the folk art forms below in their respective order:



I Madhubani



II Warli

- (A) Tamilnadu and Telangana respectively (B) Bihar and Maharashtra respectively
 (C) Orissa and Gujarat respectively (D) Kerala and Karnataka respectively
- Q6. Which of the following does the term Corporate Social Responsibility (CSR) relate to?
 (A) Ethical conduct (B) Environmental practices
 (C) Human rights & employees (D) All these
- Q7. Refugees from which country migrated to Europe en masse in 2015?
 (A) Serbia (B) Libya (C) Siberia (D) Syria

for answers, detailed explanations & 100+ student Sketches

edge.dqlabs.in | DQ Labs | 9591001000



Q8. *"I believe in going with the flow. I don't believe in fighting against the flow. You ride on your river and you go with the tides and the flow. But it has to be your river, not someone else's. Everyone has their own river, and you don't need to swim, float, sail on theirs, but you need to be in your own river and you need to go with it. And I don't believe in fighting the wind. You go and you fly with your wind. Let everyone else catch their own gusts of wind and let them fly with their own gusts of wind, and you go and fly with yours."*

Which one of the following options best sums up the passage above?

- (A) Determination (B) Self-esteem (C) Decision Making (D) Growth

Q9. Who is the creator of Amar Chitra Katha?

- (A) Premchand (B) Baba Ram Dev (C) Mohandas Pai (D) Anant Pai

Q10. Which country recycles most of its garbage to produce electricity, and imports garbage from its neighbours?

- (A) Sweden (B) Japan (C) Switzerland (D) Canada

Q11. Which of the materials listed below does not have Earth as the source?

- (A) Clay (B) Metal (C) Leather (D) Plastic

Q12. *Cartography* is the study and practice of making

- (A) Cars. (B) Maps. (C) Artwork. (D) Carts.

Q13. Air pollution can be of

- (A) Natural origin. (B) Artificial or man-made origin.
(C) Both A & B. (D) None of these.

Q14. Select the right adjective for the word *RIVER*.

- (A) Labyrinthine (B) Wolverine (C) Serpentine (D) Intertwine

Q15. The Jataka Tales are better known works of which literature?

- (A) Upanishads (B) Sangam (C) Jaina (D) Buddhist

Q16. The rate of inflation in India is measured generally with respect to movement of

- (A) consumer price index. (B) cost of living index of agriculture labour.
(C) wholesale price index. (D) money supply.

Q17. Apart from the light bulb, Thomas Edison is attributed to the invention of

- (A) Telegraph. (B) Monograph. (C) Phonograph. (D) Seismograph.



- Q18. Which country experienced an earthquake, a tsunami and a nuclear accident in March 2011?
(A) Pakistan (B) China (C) Japan (D) India
- Q19. Colours of Coriander and Cabbage fall under which colour schemes?
(A) Split Complementary (B) Analogous
(C) Complementary (D) Harmonious
- Q20. Which of the following is considered among the four old world river valley cultures apart from Indus Valley, Egypt, and Yellow River Valley of China?
(A) Mesoamerica (B) Mesopotamia
(C) Andes (D) Byzantium
- Q21. When you buy a mobile phone you look for the SAR value of a handset. SAR value is an indicator of Specific Absorption Rate of _____ to which human body is exposed to
(A) Radio Frequency Electrostatic Field
(B) Radio Frequency Electromagnetic Field
(C) Microwave Frequency Bioelectric Field
(D) Radioactive Electromagnetic Field
- Q22. Fostering cultural collaboration is one of the objectives of which UN body?
(A) UNICEF (B) UNIDO (C) UNESCO (D) UNO
- Q23. Which astronomer first claimed that the earth, the moon and the other planets revolved around the sun?
(A) Galileo Galilei (B) Nicolaus Copernicus
(C) Ptolemy (D) Isaac Newton
- Q24. The following picture depicts
(A) remote crawler
(B) hilly-biller space-walker.
(C) stark lemon squeezer.
(D) voyager 12.



Q25. The following drawing is the inside view of the Basilica of St. Maria Maggiore by Giovanni Batista Piranesi (1768). It is an example of



- (A) 2 point perspective drawing. (B) 3 point perspective drawing.
(C) 1 point perspective drawing. (D) None of these

Q26. Which shape will match the cross section of a Ladyfinger (vegetable)?

- (A) Octagon (B) Hexagon (C) Pentagon (D) Septagon

Q27. Select the odd one out:

- (A) Bimal Roy, Mrinal Sen, Satyajit Ray
(B) Ravindranath Tagore, Mahatma Gandhi, Bal Gangadhar Tilak
(C) Manto, Chughtai, Gulzar
(D) Shabana Azmi, Praseen Joshi, Sayeed Jaffery

Q28. What is the colour of a Black Box of a commercial aircraft?

- (A) Black (B) Green (C) Pink (D) Orange

Q29. The symbol © stands for

- (A) Rights of Control. (B) Registered Company Logo.
(C) Copyright. (D) Contact Information.

Q30. Google doodle pays tribute to which Indian personality in the following image?




- (A) Sudhir Tailang (B) Bal Thackeray (C) R K Laxman (D) Neelabh Banerjee



- Q31. Among the major processes in making a cloth, *Ginning* is a process of
(A) harvesting ripped cotton bales. (B) cleaning and opening the cotton bales.
(C) spinning the yarn. (D) removing the cotton seeds.
- Q32. What are the dates 9/11, 26/11 and 13/11 known for?
(A) Earthquakes (B) Terrorist Attacks
(C) Tsunamis (D) Deaths of famous personalities
- Q33. The Industrial Revolution that took place in Europe around 1750 A.D. began in which of the following countries?
(A) Germany (B) France (C) Italy (D) England
- Q34. Who is considered to be the Father of India's Atomic Energy programme?
(A) Raja Ramanna (B) Homi Bhabha
(C) Vikram Sarabhai (D) Dr. A P J Abdul Kalam
- Q35. The death of which rationalist Kannada writer triggered a spate of protests by the Indian literary, artistic, film making and scientific community in 2015?
(A) Govind Pansare (B) Channabasam
(C) Narendra Dabholkar (D) Dr. M.M. Kalburgi
- Q36. Which airport in India became fully solar powered in 2015?
(A) Cochin International Airport (B) Bengaluru International Airport
(C) Chennai International Airport (D) Hyderabad International Airport
- Q37. Which of the following statements is false?
(A) Mahabharata is narrated by Ved Vyas (B) Valmiki authored Ramacharitmanas
(C) Meghadootam is composed by Kalidasa (D) Yayati is written by Girish Karnad
- Q38. An example of Interactive Voice Response System (IVRS) that is used in our day-to-day life is
(A) The Telephone Enquiry Service. (B) The Cloud Computing Service.
(C) The Web Server Service. (D) None of these
- Q39. Which of the following is the first silent feature film made in India?
(A) Alam Ara by Ardeshir Irani (B) Shakuntala by Suchet Singh
(C) Devdas by Naresh Mitra (D) Raja Harishchandra by Dadasaheb Phalke
- Q40. Which is the most abundantly available fossil fuel in India?
(A) Natural Gas (B) Coal (C) Petroleum (D) Biogas




Study the given images below, which are selected parts of known logos/symbols. Based on this, answer questions 41 to 44.



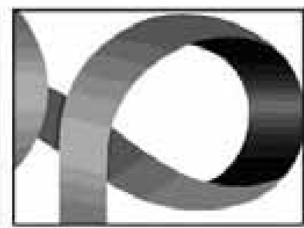
A



B



C



D

Q41. Identify the image which refers to the company/organization related/associated with finance.

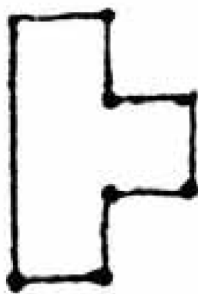
Q42. Identify the image which refers to the company/organization associated with consumer Goods.

Q43. Identify the image which refers to the company/organization associated with surface Décor.


Q44. Identify the image which refers to the company/organization associated with transport.

Question numbers 45 to 62 carry 1.0 marks each. Please read the questions carefully and select your response from the options provided.

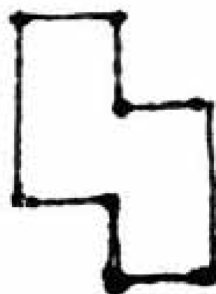
Q45. Identify the odd one out:



A



B



C



D

Q46. Identify the sequence of footprints in the images given below:



1



2



3



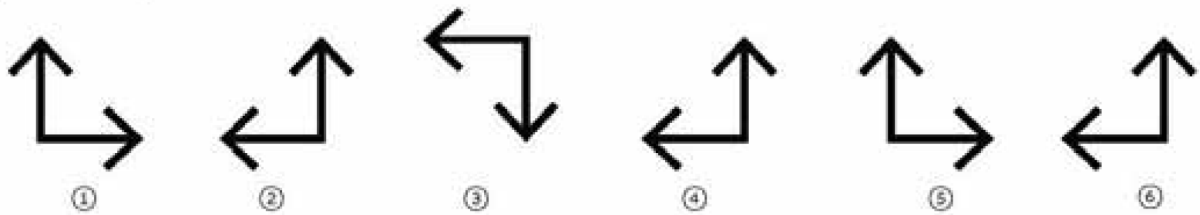
4

(A) Rabbit, Fox, Cat, Man
(C) Fox, Bear, Cat, Rabbit

(B) Fox, Rabbit, Cat, Bear
(D) None of these



Q47. Identify the odd one out:



(A) 1

(B) 2

(C) 4

(D) 6

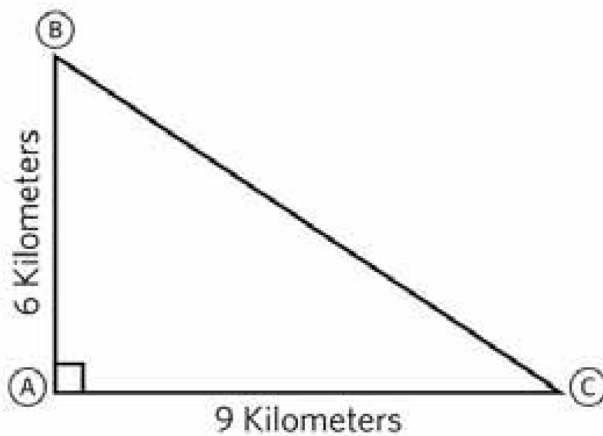
Q48. In the figure below, cycling directly from point B to point C, rather than from point B to point A and then from point A to point C, would save approximately how many kilometers?

(A) 3

(B) 2

(C) 5

(D) 4



Q49. Select the most appropriate caption that describes the image below:

(A) Leaving the past behind

(B) It's time to catch up

(C) Catch me if you can

(D) Time is running out




for answers, detailed explanations & 100+ student Sketches

edge.dqlabs.in | DQ Labs | 9591001000




Q50. The figure below shows a square inscribed in a square, which in turn is inscribed in another square. What is the probability that a point selected at random from the interior of the largest figure that will fall within the shaded region?


- (A) $1/5$
- (B) $1/4$
- (C) $1/3$
- (D) None of these




Q51. Identify the odd one out:



A



B



C



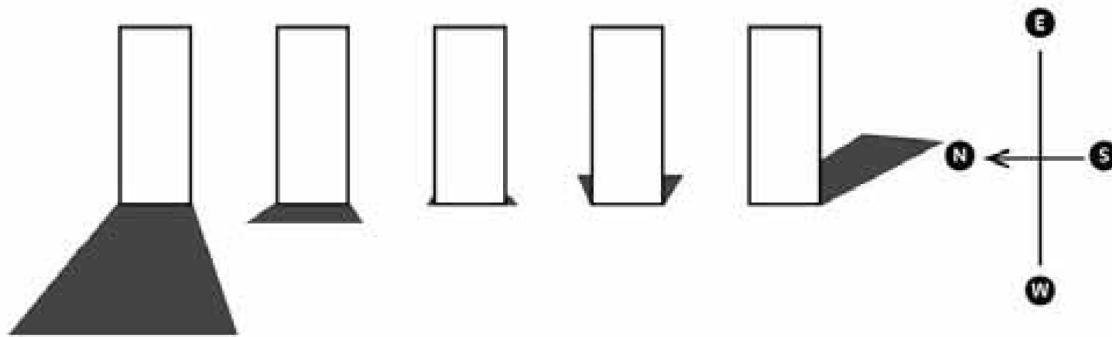
D

for answers, detailed explanations & 100+ student Sketches

edge.dqlabs.in | DQ Labs | 9591001000



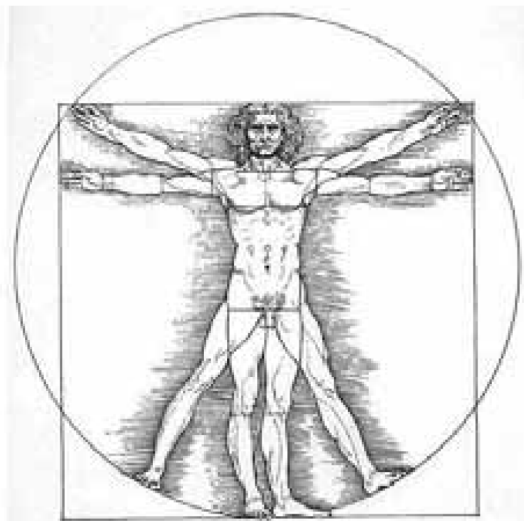
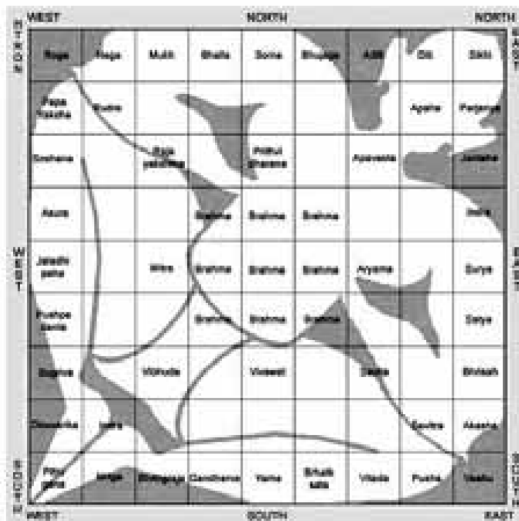
Q52. Study the shadows cast in the image below and identify the right sequence from left to right.



- (A) 5 7 2 3 7
(C) 4 6 1 5 8

- (B) 6 12 2 4 6
(D) 6 9 12 3 6

Q53. Vaastu-Purusha and Da Vinci's 'Vitruvian Man' are examples of?



- (A) Tenets of directions
(C) Tenets of proportion

- (B) Tenets of buildings
(D) Tenets of spinning

Q54. These symbols are found on the left hand side of the Indian currency notes of Rs.100/-, Rs.500/- and Rs.50/- respectively. What do they signify?



- (A) Printing Press code
(B) Decorative motifs
(C) Tactile denotation for the visually impaired
(D) Currency authentication



Q55. Squares of three grey values (M, N and O) are combined to create Figure Y. Squares of which grey value(s) have the maximum combined surface area. The grey values are as follows:

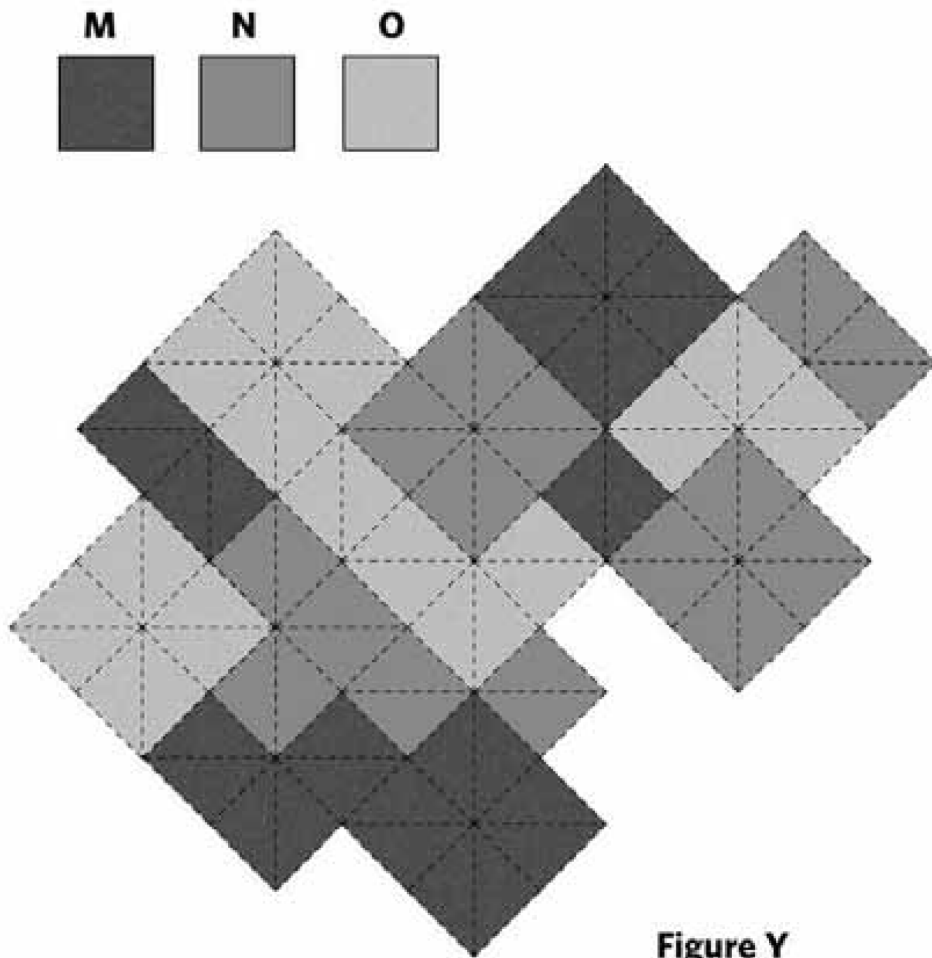


Figure Y

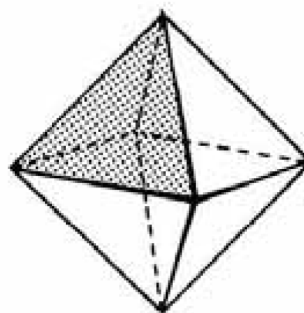
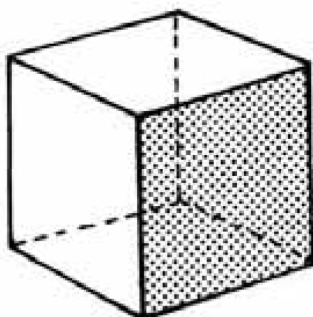
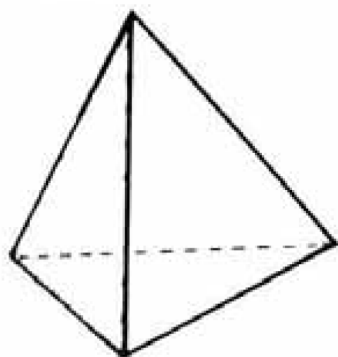
- (A) Only M
- (B) Only N
- (C) Both N and O
- (D) Both M and N

Q56. A general assumption says that in storytelling, the main character is driven by two kinds of desires — conscious desires and unconscious desires. Even if the character's conscious desires are met by the end of the story, the story seems to be incomplete if the unconscious desires aren't met. In your opinion which statement comes closest to the idea of unconscious desires?

- (A) Unconscious desires are the ones that the main character might not be aware about
- (B) Unconscious desires are the ones that are more important than the conscious desires
- (C) The desires of the main character might change as the story progresses
- (D) All these



Q57. Images given below are for your reference. How many faces and edges does an Icosahedron have?

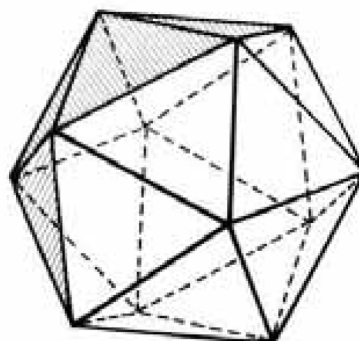


Tetrahedron: 4 faces & 6 edges

Cube: 6 faces & 12 edges

Octahedron: 8 face & 12 edges

- (A) 20 faces & 30 edges
- (B) 18 faces & 24 edges
- (C) 20 faces & 20 edges
- (D) 16 faces & 24 edges



Q58. Match the following:

- | | |
|-------------|-----------------------|
| Plastic | Used for making |
| p) Melamine | 1. Electric fillings |
| q) Teflon | 2. Cups & Crockery |
| r) Bakelite | 3. Rain coats |
| s) PVC | 4. Non-stick utensils |

(A) p-2, q-1, r-4, s-3

(B) p-2, q-4, r-1, s-3

(C) p-3, q-2, r-1, s-4

(D) p-3, q-1, r-2, s-4

Q59. Mrs. Gurpreet Kaur took a taxi to meet her three friends for lunch. They were waiting for her outside the restaurant when she pulled up in the car. She was so excited to see her friends that she left her handbag in the taxi. As the taxi pulled away, she and her friends took notice of the number plate so they would be able to identify the car when they called the taxi company.

The four women seem to agree that the number plate begins with the letters GJ.

Three of them seem to agree that the number plate ends with the numbers 123.

Three of them seem to think that the 3rd letter is X. Three of them think that the 4th letter is K.

The four license plate numbers below represent what each of the four women think and saw. Which one is most likely the license plate number of the taxi?

(A) GJXY123

(B) GJYK123

(C) GJXK123

(D) GJXX123



Q60. A gardener plants flowers in the following sequence Carnations, Marigold, Daffodils, Jasmine and Tiger Lilies. If the gardener planted 48 flowers, which flower did he plant last?

- (A) Carnation (B) Marigold (C) Daffodils (D) Tiger Lily

Q61. "The animals themselves are incapable of demanding their own liberation, or of protesting against their condition with votes, demonstrations or bombs. Human beings have the power to continue to oppress other species forever, or until we make this planet unsuitable for living beings. Will our tyranny continue proving that we really are the selfish tyrants that the most cynical of poets and philosophers have always said we are? Or will we rise to the challenge and prove our capacity for genuine altruism by ending our ruthless exploitation of the species in our power, not because we recognize that our position is morally indefensible? The way in which we answer this question depends on the way in which each one of us, individually, answers it".

In your opinion, which word best summarizes the passage above?

- (A) Cynicism (B) Animal rights
(C) Civilisation (D) Ethics and moral philosophy

Q62. A person sitting in an open car moving at constant velocity throws a ball vertically upwards in the air. If the effect of air resistance is neglected, the ball will fall

- (A) exactly in hands of the person. (B) outside the car.
(C) in the car behind the person. (D) in the car ahead of the person.

Question numbers 63 to 69 carry 2 marks each. Please read the questions carefully and select your response from the options provided.

Q63. How many square tiles, each with a perimeter of 64 inches, must be used to completely cover a bathroom floor with a width of 64 inches and a length of 128 inches?

- (A) 32 tiles (B) 48 tiles (C) 64 tiles (D) 96 tiles

Q64. What is the common word that can be used together with all of the following words?

Chocolate, Truth, Squash

- (A) Edible (B) Brown (C) Bitter (D) None of these

Q65. Select the right sequence of language in which the word Design is written below:

DESIGN ಡಿನ್ಯಾಸ್ ಡಿಜೈನ್ ಡಿಜೈನ್ ಡಿಜೈನ್ ಡಿಜೈನ್ ಡಿಜೈನ್


- (A) English Gujarati Hindi Tamil Kannada Bengali Punjabi
(B) English Kannada Hindi Tamil Gujarati Punjabi Bengali
(C) English Tamil Hindi Punjabi Kannada Bengali Gujarati
(D) English Kannada Punjabi Gujarati Tamil Hindi Bengali



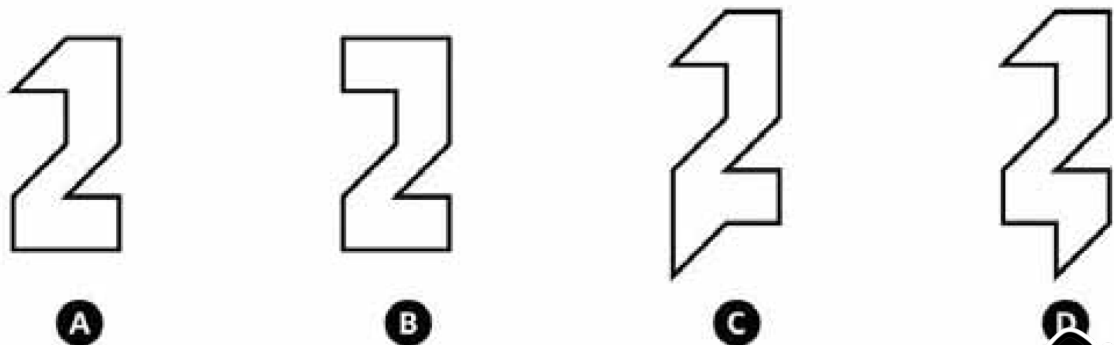
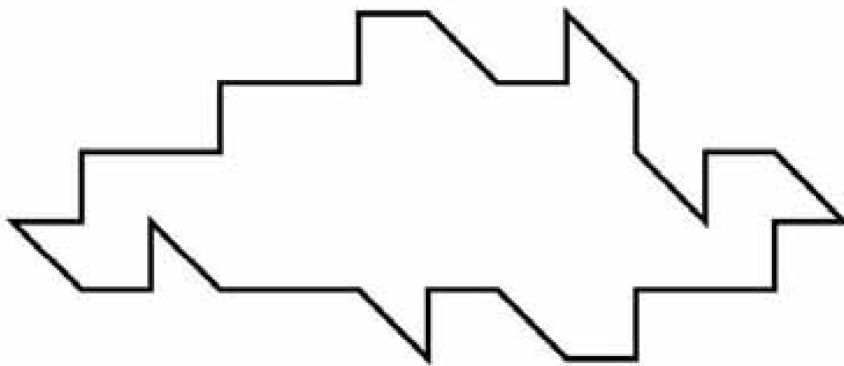
- Q66. In a *Departmental Store*, the *Apparel* section is located to the right of *Bakery* section which is located on the right side of *Cosmetics* section. If the *Dairy Products* section is in front of *Cosmetics* section and *Electronics* section is in front of *Apparel* section, which one of the following is true?
- (A) The *Dairy Products* section is on the left of *Electronics* section
 - (B) The *Cosmetics* section is on the left of *Apparel* section
 - (C) The *Cosmetics* section is on the right of *Apparel* section
 - (D) The *Dairy Products* section is one the right of *Electronics* section

- Q67. Identify the number of individual circles, triangles and squares from the image below:

- (A) 1 Circle, 2 Squares, 1 Triangle
- (B) 2 Circles, 2 Squares, 1 Triangle
- (C) 1 Circle, 1 Square, 2 Triangles
- (D) None of these



- Q68. Which piece can be used multiple times to fill the shape below?



Q69. Match the following mathematical expressions with the images given below

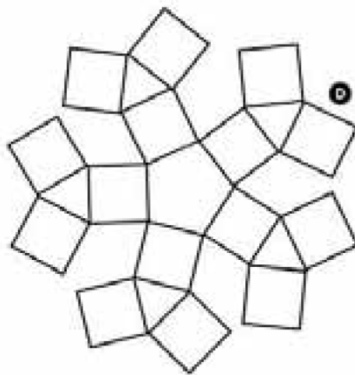

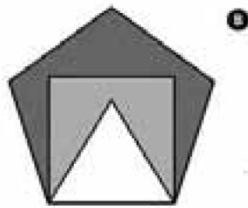
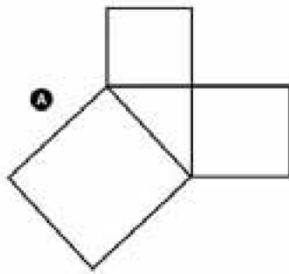
(i) $3+4+5$

(ii) $5-4-3$

(iii) $3^2 + 4^2 = 5^2$

(iv) $4 \times 3 \times 5$

Images



(A) A(iii), B(ii), C(i), D(iv)

(C) A(iii), B(ii), C(iv), D(i)

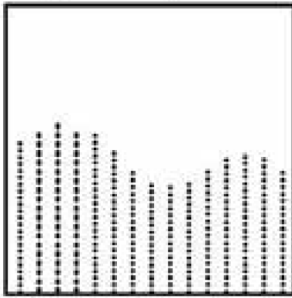
(B) A(ii), B(iii), C(i), D(iv)

(D) A(iii), B(i), C(ii), D(iv)




Question numbers 70 to 81 carry 0.75 marks each. Please read the questions carefully and select your response from the options provided.

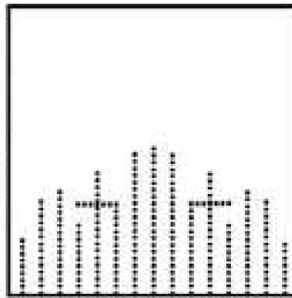
Study the images below and answer questions 70 to 73.



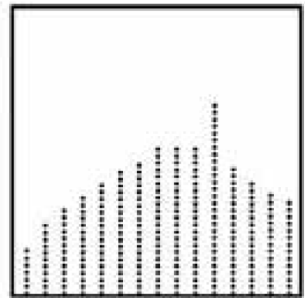
A



B



C



D

Q70. Which image represents the word 'symmetry'?

Q71. Which image represents the word 'emphasis'?

Q72. Which image represents the word 'rhythm'?

Q73. Which image represents the word 'movement'?

Study the images below and answer question 74 to 77.



A



B



C



D

Q74. Which image represents the word 'aggressive'?

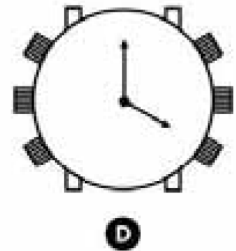
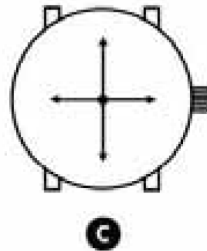
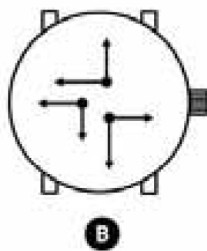
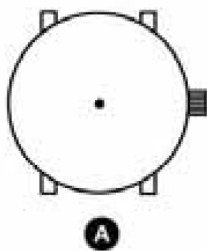
Q75. Which image represents the word 'fluid'?

Q76. Which image represents the word 'flamboyant'?

Q77. Which image represents the word 'feminine'?



Study the images below and answer question 78 to 81.



Q78. Which image represents the phrase 'which way to go'?


Q79. Which of the following images represents the phrase 'many possibilities coexists'?

Q80. Which of the following images represents the phrase 'overloaded with burden'?

Q81. Which of the following images represents the word 'frozen'?

Question numbers 82 and 83 carry 1.5 marks each.

Answer the questions based on the image given below:



Q82. How many triangles can you form by joining the above group of dots so that 3 dots are left?

- (A) Six (B) Eight (C) Twelve (D) Twenty four

Q83. How many quadrilaterals can you form by joining the above group of dots?

- (A) Five (B) Six (C) Nine (D) Twelve

Questions 84 to 88 have more than one correct answer and carry 0.8 marks each. Please read the questions carefully and select the most correct option (only one) from the options provided.

Q84. Complete the sentence:

She was

- (A) almost six feet tall. (B) the light of my life.
(C) a doctor by profession. (D) emotionally very vulnerable.



Q85. Complete the sentence:

He was on a roller coaster.....

(A)ride at the fair.

(C)and he felt very scared.

(B)of emotions.

(D)with a group of friends.

Q86. Complete the sentence:

Failure is.....

(A)very bad. No one should fail.

(C)a sad experience. Try again.

(B)a representation of a person's abilities.

(D)an orphan with no takers.

Q87. Complete the sentence:

The Moon is

(A)of cultural importance.

(C)a satellite of the earth.

(B)like a roti for the poor man.

(D)a source of light at night.

Q88. Complete the sentence:

The day I left my hometown, I was.....

(A)thinking about my action plan.

(C)feeling blue.

(B)emotionally depressed.

(D)on my own.

***** End of Part I *****



Space for Rough Work

for answers, detailed explanations & 100+ student Sketches

edge.dqlabs.in | DQ Labs | 9591001000





राष्ट्रीय डिज़ाइन संस्थान
NATIONAL INSTITUTE OF DESIGN

B.Mes 2016 DAT Prelims Test Paper

Part-2



for answers, detailed explanations & 100+ student Sketches

edge.dqlabs.in | DQ Labs | 9591001000

PART-II. Question number 89 to 91 carry 10 marks each. Please read the questions carefully and answer in the space provided.

Q89. Read the following scenarios:

- 1. A **glass** that is half filled goes in search of water to fill itself.
- 2. A **circle** wakes up one day to find it has no option but to share its space with a triangle.
- 3. A **little girl** meets a lioness who is lost trying to find her way out of the intimidating city.

Choose any one scenario and write down three challenges that the first character (highlighted in **bold**) might face and also write solutions for each of the three challenges in the space provided.

The scenario chosen:

Challenge 1.....
.....
.....
.....
.....
.....

Solution
.....
.....
.....
.....
.....
.....
.....
.....
.....



Challenge 2.....


Solution

Challenge 3.....

Solution



Q90. In the given space below sketch a poster promoting healthy diet among the youth. Your poster must include a burger and a tortoise. Give an appropriate title in English, of less than six words.




Title



Q91. Read the following scenario:

"A creature that is part human, part an endangered species (plant or animal) and part automobile, and who is unable to decide whether to travel into the past or future".

Visualize and draw the above scenario in a 'single frame' given below.



***** End of Part II *****



Space for Rough Work

for answers, detailed explanations & 100+ student Sketches

edge.dqlabs.in | DQ Labs | 9591001000



For more Detail Explanation and sample sketches
Log on to edge.dqlabs.in

ANSWER KEY FOR BOOKLET CODE 18 SERIES A [PART I]

Question No	Ans Key	Question No	Ans Key	Remarks
1	C	45	D	
2	A	46	B	
3	A	47	C	
4	A	48	D	
5	B	49	D	ALL OTHER OPTIONS CARRIES 0.25 MARKS.
6	D	50	B	
7	D	51	D	
8	A	52	D	
9	D	53	C	
10	A	54	C	
11	C	55	C	
12	B	56	D	
13	C	57	A	
14	C	58	B	
15	D	59	C	
16	C	60	C	
17	C	61	B&D	B&D BOTH THE OPTIONS ARE CORRECT.
18	C	62	A	
19	B	63	A	
20	B	64	C	
21	B	65	B	
22	C	66	A&B	A&B BOTH THE OPTIONS ARE CORRECT.
23	B	67	B	
24	C	68	D	
25	C	69	A	
26	C	70	C	
27	D	71	D	
28	D	72	A	
29	C	73	B	
30	C	74	C	
31	D	75	D	
32	B	76	A	
33	D	77	B	
34	B	78	C	
35	D	79	B	
36	A	80	D	
37	B	81	A	
38	A	82	C	
39	D	83	C	
40	B	84	B	B OPTION WILL GET 0.8, D OPTION WILL GET 0.4.
41	B	85	B	B OPTION WILL GET 0.8, C OPTION WILL GET 0.4.
42	A	86	D	D OPTION WILL GET 0.8, C OPTION WILL GET 0.4.
43	D	87	B	B OPTION WILL GET 0.8, A OPTION WILL GET 0.4.
44	C	88	D	D OPTION WILL GET 0.8, B OPTION WILL GET 0.4.



for uploading
as website
bun



for answers, detailed explanations & 100+ student Sketches

edge.dqlabs.in | DQ Labs | 9591001000

DQ Labs HALL OF FAME

NID



BARRI WAHLANG
NID PG 2020
RANK - 01



PRASHANT PRADHAN
NID PG 2020
RANK - 01



JAYA PRABHAKARAN
NID PG 2020
RANK - 01



PARVATHI
NID PG 2020
RANK - 01



MANASVINI
NID PG 2017
RANK - 01



KUSHAL SANDEEP
NID UG 2018
RANK - 03



LAXMI VIDYASAGAR
NID UG 2019
RANK - 04



DEVANSHI KAJANSHI
NID UG 2016
RANK - 04



RHEA ANGELA
NID UG 2018
RANK - 04



RAGHUL SREEDHAR
NID UG 2020
RANK - 05



TRISHA AMALERKAR
NID UG 2017
RANK - 05



TUSHAR SHIVAM
NID UG 2020
RANK - 05



CHANDRU
NID PG 2020
RANK - 06



SHUBHRA AGARWAL
NID UG 2020
RANK - 07



HARINI SURESH
NID UG 2020
RANK - 10



SHRIYA GURKHA
NID UG 2019
RANK - 10



POORNIMA S
NID UG 2017
RANK - 10



NIKITA DHAMIYA
NID UG 2020
RANK - 12



SUHANI CHHEDA
NID UG 2020
RANK - 14



ARUNDHATHI
NID UG 2020
RANK - 14



VRITTI MANGULLEY
NID UG 2019
RANK - 20



KOUSHIK RAM
NID PG 2020
RANK - 20



SAI VIDYASRI G
NID PG 2020
RANK - 19

for answers, detailed explanations & 100+ student Sketches

edge.dqlabs.in | DQ Labs | 9591001000



DQ Labs HALL OF FAME

UCEED



DARE LOBO
UCEED2017
RANK - 06



AMISHA NAIR
UCEED 2020
RANK - 8



CHERIAN JEREMIAH
UCEED 2018
RANK - 06




ZAID KHURAM
UCEED 2018
RANK - 14



MEDHAVI PARASAR
UCEED 2018
RANK - 15



SPOORTHI NAGESH
UCEED2018
RANK - 30



ARYAN VIJAY
UCEED 2020
RANK - 47



MADHAV G
UCEED2019
RANK - 50



UMANG SRIVASTA
UCEED2018
RANK - 63



SMIRTHI S
UCEED 2020
RANK - 64

NIFT RANKS



SIRIGOWRI
NIFT 2018
RANK - 01



DEEKSHITA RAMA
NIFT 2019
RANK - 03



SEEMRAN P
NIFT 2017
RANK - 07



JANANI
NIFT 2018
RANK - 10



SMRITHI S
NIFT 2020
RANK - 12



NIDHI L RAO
NIFT 2020
RANK - 27



RHEA MORAS
NIFT 2018
RANK - 35



HARINI SURESH
NIFT 2020
RANK - 41



ANMOL VENKATESH
NIFT 2018
RANK - 42



ANANYA JAIN
NIFT 2018
RANK - 46

for answers, detailed explanations & 100+ student Sketches

edge.dqlabs.in | DQ Labs | 9591001000



DQ Labs HALL OF FAME

KCET NATA RANKS



MRUDHULAA C R
KCET 2016
RANK - 1



POORNIMA S
NATA 2017
RANK - 2



PRASIDH S BAGAMANE
NATA 2020
RANK - 3




NEHA SARAH ABRAHAM
NATA 2016
RANK - 3



NIKITA BIJU THOMAS
NATA 2019
RANK - 4



DEVYANI RAMAMOORTHY
NATA 2016
RANK - 4



ANIRUDH RAMESH
NATA 2020
RANK - 5



RISHI KUMARAN
NATA 2016
RANK - 5



ANIRUDH SHANKAR
NATA 2020
RANK - 6



SUMUKH S
NATA 2016
RANK - 6



ANANYA VAIDYANATHAN
NATA 2020
RANK - 6



BHUMIKA P B
NATA 2018
RANK - 7



ULLAS M
NATA 2016
RANK - 7



DISHA DILIP
NATA 2020
NATA - 8



SWARNAVALLI
NATA 2018
NATA - 8



ADITHI BHANU PRAKASH
NATA 2020
RANK - 9



ADITYA KARIYA
NATA 2017
RANK - 9



SHASHANK SHANKAR
NATA 2018
RANK - 10



AISHWARYA P HEGDE
NATA 2016
RANK - 10



SAMYATHA S
NATA 2020
RANK - 11



CHARITHA N REDDY
NATA 2020
RANK - 12



MELANIE MARY
NATA 2016
RANK - 12



DISHA MUKHERJEE
NATA 2018
RANK - 13



for answers, detailed explanations & 100+ student Sketches

edge.dqlabs.in | DQ Labs | 9591001000

DQ Labs HALL OF FAME


NATA



PRAMITHA S S
NATA 2020
SCORE - 182.5



CHARITHA N REDDY
NATA 2020
SCORE - 177.5



ANIRUDH RAMESH
NATA 2020
SCORE - 172



NITYA MAHESHA
NATA 2020
SCORE - 171.5



PRANAV S KADAMBI
NATA 2020
SCORE - 171



POORNIMA S
NATA 2020
SCORE - 171



R GAURAV
NATA 2020
SCORE - 170.5



LAKSHMI
NATA 2020
SCORE - 170.5



ANANYA VAIDYANATHAN
NATA 2020
SCORE - 168.5



ANIKETH KRISHNAN
NATA 2020
SCORE - 168.5



DISHA DILIP
NATA 2020
SCORE - 168.5



SIMRITHA B S
NATA 2020
SCORE - 168




GANESH BS
NATA 2020
SCORE - 167



DISHA MUKHERJEE
NATA 2020
SCORE - 166



SNEHA S
NATA 2020
SCORE - 166



ADITHI BHANU PRAKASH
NATA 2020
SCORE - 165



SHREEJA PAGDALA
NATA 2020
SCORE - 165



SHRIYA SAPHER
NATA 2020
SCORE - 165



VAISHNAVI SURESH
NATA 2020
SCORE - 165



RAJAT KAPOOR
NATA 2020
SCORE - 164.5



RASHI BISHT
NATA 2020
SCORE - 163.5



SHRUTHI SUNDER
NATA 2020
SCORE - 163.5



ARPITHA PRASAD
NATA 2020
SCORE - 163



KAKARLA PUNEETHA
NATA 2020
SCORE - 163



for answers, detailed explanations & 100+ student Sketches

edge.dqlabs.in | DQ Labs | 9591001000