



राष्ट्रीय डिज़ाइन संस्थान
NATIONAL INSTITUTE OF DESIGN

M.Des 2019 DAT Prelims Test Paper Part-1 CDAT

(Common Design Aptitude Test)



for answers, detailed explanations & 100+ student Sketches

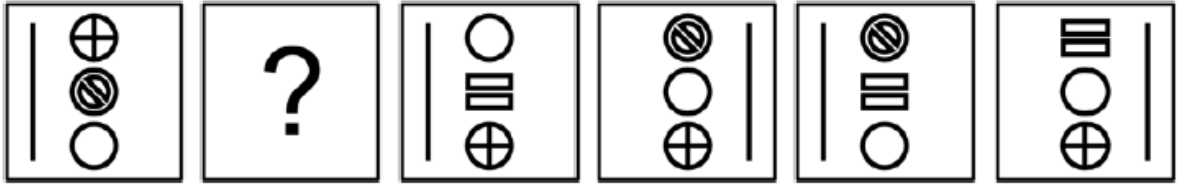
edge.dqlabs.in | DQ Labs | 9591001000

PART 1

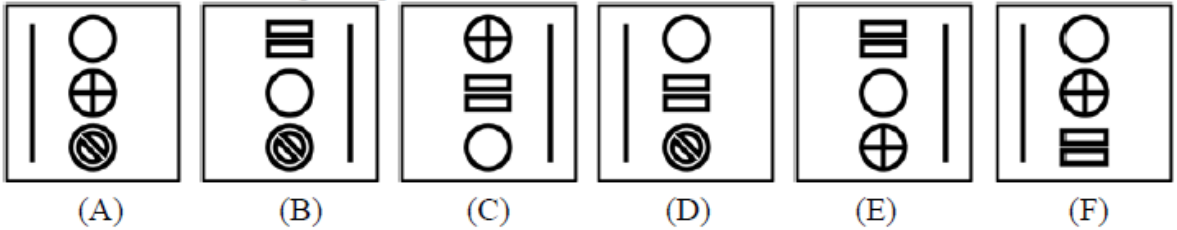
Do not write your name anywhere in the booklet. This will lead to disqualification. Please read the question carefully and follow the instructions provided.

Directions: Question No.1 carries 1.0 mark.

Q1. Study the following series of images.



Which of the following completes the series above?



Answer: _____

Directions: Question No. 2 to 9 carries 2 marks each.

Q2. Below are the national flags of Pakistan (Image 01) and Bhutan (Image 02) in gray scale.



Image 01: National flag of Pakistan




Image 02: National flag of Bhutan

Based on the color actually used in the national flags of Pakistan and Bhutan, indicate from the list below that they belong to.


[Complementary, Analogous, Monochrome, Primary, Secondary, None]

Color scheme of the national flag of Pakistan: _____

Color scheme of the national flag of Bhutan: _____




- Q3. Following are the images of animals used by organizations in their identity / branding / logo. In the space below each image write the name of the brand / company associated with it.




- Q4. The following patterns/symbols/icons fully / partially represent the branding / identity of companies or organizations. In the space below each image write the area/domain in which the company/organization operates.

Choose the area/domain from: Telecommunication, Automobile, Pharmaceutical, Food & Beverages.



- Q5. Following are the images of leaves of vegetables. In the space below each image write the name of the vegetable for the leaf.


Choose the vegetable leaf from: Lemon, Lady Finger, Bitter gourd, Tomato.



Q6. Refer the shape A and shape B below. How many times does shape A need to be repeated in order to fill shape B completely (without overlapping and leaving any gaps in between)?



Shape A



Shape B

Answer: _____

Q7. Write the name of the country for each of the object/clothing/architecture from where it belongs to in the space provided below the image of an object.

Choose the country from Ethiopia, Bhutan, Mexico and Russia.



Image 01 _____




Image 02 _____



Image 03 _____



Image 04 _____

for answers, detailed explanations & 100+ student Sketches

edge.dqlabs.in | DQ Labs | 9591001000



Q8. Following are images of “Indian Wall Art” being practiced in different regions across India.
Below each image write the name of the State to which it belongs.



State: _____



State: _____



State: _____



State: _____

for answers, detailed explanations & 100+ student Sketches

edge.dqlabs.in | DQ Labs | 9591001000



Q9. Study the images of Set 01 and Set 02.

Images of Set 01

(A)



(B)



(C)



(D)



Images of Set 02

(1)



(2)



(3)



(4)



Associate visual expression of images of Set 01 to Set 02 and write the answer below:

(A) _____

(B) _____

(C) _____

(D) _____

for answers, detailed explanations & 100+ student Sketches

edge.dqlabs.in | DQ Labs | 9591001000



Directions: Question No. 10 to 11 carries 2.50 marks each.

Q10. Identify five differences between image A and B. Circle the differences in image B.

A



B



for answers, detailed explanations & 100+ student Sketches

edge.dqlabs.in | DQ Labs | 9591001000



Q11. Below are the symbols of sustainable development goals as published by United Nations Development Programme (UNDP). Write the goal in words against each symbol.

a)  _____

b)  _____

c)  _____

d)  _____


e)  _____




Directions: Question No. 12 carries 3.0 marks.

Q12. Study the images below. Identify the pattern and draw the image which comes next in box No 04.

Draw the image in black colour only. Thickness of the pattern must be same as images 01, 02 and 03.




01



02



03



04




Space for Rough Work

for answers, detailed explanations & 100+ student Sketches

edge.dqlabs.in | DQ Labs | 9591001000





राष्ट्रीय डिज़ाइन संस्थान
NATIONAL INSTITUTE OF DESIGN

Part-II: Domain Specific Test

(Communication Design)



for answers, detailed explanations & 100+ student Sketches

edge.dqlabs.in | DQ Labs | 9591001000

Questions 1 to 5 are subjective type questions. Do not write your name anywhere in the booklet. This will lead to disqualification.


Q1. Five pictographs are given below.

(20 marks)



Draw one scenario in which these pictographs may be present.

Include the pictographs in your drawing, at the appropriate locations/colour/scale.



for answers, detailed explanations & 100+ student Sketches

edge.dqlabs.in | DQ Labs | 9591001000



Q2. Your task is to prepare a campaign to meet the gender equality goals of your college/organisation.

TASK A

Write about 5 situations in your college/organisation where gender equality can be improved.

Each point should be written in not more than 2 sentences.

(1 x 5= 5 marks)

- i.

- ii.

- iii.

- iv.

- v.

for answers, detailed explanations & 100+ student Sketches


edge.dqlabs.in | DQ Labs | 9591001000



TASK B

Design a poster to communicate any one of the situations described in Task A.
You may use colours to emphasize the message.


(10 marks)



for answers, detailed explanations & 100+ student Sketches

edge.dqlabs.in | DQ Labs | 9591001000

Q3. Complete the following incomplete scribbles using not more than three lines (straight or curved) for each scribble. Give a single-word title for each. (3 x 5 = 15 marks)











for answers, detailed explanations & 100+ student Sketches

edge.dqlabs.in | DQ Labs | 9591001000



Q4. Suppose you are trapped in a building and fire broke out. How will you save yourself and others? Visualise it in 3 frames, given below. (5 x 3 = 15 marks)

for answers, detailed explanations & 100+ student Sketches

edge.dqlabs.in | **DQ Labs** | **9591001000**



(10 marks)

- The objects may appear in any order in the story.

This image shows a blank sheet of white paper with horizontal blue ruling lines. The lines are evenly spaced and run across the width of the page. In the bottom right corner, there is a small, stylized cartoon character with black eyes and a pink mouth, appearing to peek from behind the edge of the paper.

edge.dqlabs.in | DQ Labs | 9591001000



Part-II: Domain Specific Test

(Industrial Design)

for answers, detailed explanations & 100+ student Sketches

edge.dqlabs.in | **DQ Labs** | **9591001000**






Questions 1 to 6 are of subjective type. Do not write your name anywhere in the booklet. This will lead to disqualification.

Q1. In the boxes provided below, draw 5 different uses (other than its intended use) for **one** of the following objects: (10 marks)

a) Bottle cap

b) Toothpick



Q2 a) Draw the 3D view of the image shown.

(5 marks)



Space for task a:

for answers, detailed explanations & 100+ student Sketches

edge.dqlabs.in | DQ Labs | 9591001000



- b) Imagine that the object A shrinks to half its size and object B enlarges to twice its size (A. Water bottle, B. Glass). (5 marks)

Draw them in 3D view.

Space for task b:

for answers, detailed explanations & 100+ student Sketches

edge.dqlabs.in | DQ Labs | 9591001000



Q3. Imagine a person drinking a hot beverage from a mug. Depict through sketches 5 problems faced by the person during this task. Describe in words the problem depicted.

(10 marks)









for answers, detailed explanations & 100+ student Sketches

edge.dqlabs.in | DQ Labs | 9591001000







for answers, detailed explanations & 100+ student Sketches

edge.dqlabs.in | DQ Labs | 9591001000



- Q4. Give 2 original solutions that would help you wake up without the possibility of you falling back to sleep. (15 marks)

In the space provided below, sketch the 2 solutions you have proposed communicating how they achieve their goal.

Solution 1:

for answers, detailed explanations & 100+ student Sketches

edge.dqlabs.in | DQ Labs | 9591001000



Solution 2:

for answers, detailed explanations & 100+ student Sketches

edge.dqlabs.in | DQ Labs | 9591001000



- Q5. For an outdoor trek that you are planning, you need to carry the following objects: water bottle, sandwich, book, mobile phone, pair of shoes. Design a product to enable you to accommodate and carry all these items in it together. (25 marks)

In the spaces provided below –

- A. Make a realistic drawing of the product you have designed, showing relevant details.
- B. Draw a realistic sketch of the product in use.

In your sketches indicate the product's main features with labels.

Space for task A:

for answers, detailed explanations & 100+ student Sketches

edge.dqlabs.in | DQ Labs | 9591001000



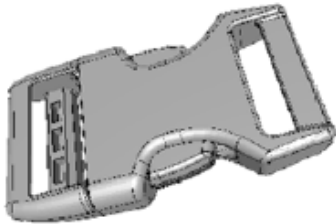



Space for task B:

for answers, detailed explanations & 100+ student Sketches

edge.dqlabs.in | DQ Labs | 9591001000








Q6. Associate entities in Column 2 with the correct entities in Column 1 by making entries in Column 3 following the example shown. (5 marks)

Column 1	Column 2	Answer column
1. (example) Taj Mahal	A. 	(example) B
2. 	B. (example) Marble	
3. 	C. 	
4. Surgery	D. Modular	
5. Eames	E. Motor skill development	
6. Sanp fit	F. Slip-casting	

for answers, detailed explanations & 100+ student Sketches

edge.dqlabs.in | DQ Labs | 9591001000



Column 1	Column 2	Answer column
7. 	I. 	
8. Bearing/Friction	H. Electricity	
9. 	J. 	
10. 	K. Graphene	

for answers, detailed explanations & 100+ student Sketches

edge.dqlabs.in | DQ Labs | 9591001000



Part-II: Domain Specific Test

(Inter-Disciplinary Design Studies)

for answers, detailed explanations & 100+ student Sketches

edge.dqlabs.in | DQ Labs | 9591001000



Questions 1 to 7 are of subjective type. Do not write your name anywhere in the booklet. This will lead to disqualification.

Q1. Give your interpretation of the image below and give an appropriate proverb for it. (5 marks)



Interpretation

Proverb: _____



Q2. Sketch and explain two concepts on enhancing the user experience in the context of the image given below. (15 marks)



Concept 1

for answers, detailed explanations & 100+ student Sketches

edge.dqlabs.in | DQ Labs | 9591001000



Concept 2

Concept 1

Concept 2

for answers, detailed explanations & 100+ student Sketches

edge.dqlabs.in | DQ Labs | 9591001000



Q3A. Create three business ideas to transform Khadi as a global trend.

(6 marks)

Business Idea 1

Business Idea 2

Business Idea 3



Q3B. Represent any one idea proposed in Q3A through an advertisement for an international magazine in the space given below. (4 marks)

for answers, detailed explanations & 100+ student Sketches

edge.dqlabs.in | DQ Labs | 9591001000



Q4. Consider IKEA a global brand that is planning to launch their retail outlets in four Indian cities namely Somnath, Madurai, Amritsar and Varanasi.

A) List the factors to be considered for launching it in each of these cities. (4 marks)

Somnath

Madurai

Amritsar

Varanasi

for answers, detailed explanations & 100+ student Sketches

edge.dqlabs.in | DQ Labs | 9591001000



- B) For any of the two cities in Q4 (A) represent the launching plan through a diagram for IKEA to implement. (6 marks)

City: _____

City: _____

for answers, detailed explanations & 100+ student Sketches

edge.dqlabs.in | DQ Labs | 9591001000



Q5. Create a story that can be represented by any of the twelve icons given below.



TASK A

In the 12 boxes, draw the icons in the sequence of the story

(6 marks)

1	2	3	4
5	6	7	8
9	10	11	12

for answers, detailed explanations & 100+ student Sketches

edge.dqlabs.in | DQ Labs | 9591001000



Write your story below.

(9 marks)

[illegible]

- Q6. Below is an image of shopping cart. Draw a family consisting of a father, a mother and 2 children under 10 years of age selecting products from a display rack, with reference to the given image. (10 marks)



for answers, detailed explanations & 100+ student Sketches

edge.dqlabs.in | DQ Labs | 9591001000



This image shows a blank sheet of white paper with horizontal ruling lines. The lines are evenly spaced and run across the width of the page. In the bottom right corner, there is a small, stylized cartoon character. The character has two large, square eyes with black pupils, a small black nose, and a simple black outline for its body and limbs. It appears to be peeking or standing behind the edge of the paper.

edge.dqlabs.in | DQ Labs | 9591001000



Part-II: Domain Specific Test

(Textile, Apparel, Lifestyle and Accessory Design)

for answers, detailed explanations & 100+ student Sketches

edge.dqlabs.in | DQ Labs | 9591001000



Do not write your name anywhere in the booklet. This will lead to disqualification.

Question Nos. 1 to 6 carries 1 marks each

Q1. Identify the symbol and mention the country this belongs to or where this was designed.



Answer: _____

Q2. *"His or Her understanding of material is combined with mastery of the tools, techniques and processes that have evolved over the centuries through social and cultural interactions."* - (Handmade in India, by Aditi Ranjan & M P Ranjan). Who does "his or her" refer to in the quote above?

Answer: _____

Q3. From the list below, identify the fiber that does not come under the category of 'Bast fibers'.

- | | |
|------------|--------------|
| (A) Jute | (B) Okra |
| (C) Banana | (D) Milkweed |

Q4. Choose the correct option. The "new aesthetics" is:

- a) deconstruction as termed by J. Derrida
- b) order of things by Michel Foucault
- c) blending of virtual and physical by James Bridle
- d) Reasoned judgment by Emmanuel Kant

Q5. Identify the artist and the title of the image.



Answer: _____

for answers, detailed explanations & 100+ student Sketches

edge.dqlabs.in | DQ Labs | 9591001000



- Q6. Only textile products that contain a minimum of 70% organic fibers can become _____ certified. All chemical inputs such as dyestuffs and auxiliaries used must meet certain environmental and toxicological criteria. The choice of accessories is limited in accordance with ecological aspects as well. A functional waste water treatment plant is mandatory for any wet-processing unit involved and all processors must comply with social criteria. The key criteria of certification are, its quality assurance system and the principles of the review and revision procedure.

Question Nos. 7 to 9 carries 2 marks each

- Q7. You are a handbag manufacturer having a turn over of less than Rs.10,00,000/- and selling products in more than states. Would the GST number apply in this scenario?
Circle the correct answer.

Yes / No

- Q.8 Associate entities in Column 2 with the correct entities in Column 1 by making entries in Column 3 following the example shown.

Column 1	Column 2	Answer Column
1. (example) Taj Mahal	A. Leading trade fair for home textile	(example) B
2. VITUS 3D Scanner	B. (example) Marble	
3. Pantone	C. Trend forecasting company code	
4. WGSN	D. a system for matching colour with	
5. Heimtextil	E. Sizing	

- Q9. How does 'Waterless Dyeing Method' work? Describe the impact of it on any specific design problem of your choice in the ruled space below.

for answers, detailed explanations & 100+ student Sketches

edge.dqlabs.in | DQ Labs | 9591001000



Q10. *“Biomimicry brings nature and technology together to create exciting new materials that are smarter and more sustainable”.*

Explain with 3 examples of innovative materials that are inspired by biomimicry.

1. _____


2. _____

3. _____



Question Nos. 11 to 14 carries 15 marks each

Q11. Observe the drawings. Complete the drawing in each space such that the three completed drawings are distinct from each other. Below each drawing give a title to communicate what it depicts.



Title: _____



Title: _____



Title: _____

for answers, detailed explanations & 100+ student Sketches


edge.dqlabs.in | DQ Labs | 9591001000




Q12. Study the images provided in frame 1 and frame 5. Establish a connection between the two by drawing a series of transformations from one to the other in the frames 2, 3 and 4.




Frame 1



Frame 4



Frame 2



Frame 5



Frame 3

for answers, detailed explanations & 100+ student Sketches

edge.dqlabs.in | DQ Labs | 9591001000



- Q13. A Highway is being converted into four lanes, where rocks are being cut down to make it plain land and to widen the road. Civil construction workers at the site are constantly showered by flakes of rocks and rocky sand under harsh sunlight.
- (a) Visually represent the scenario.
 - (b) Suggest 2 solutions that address the issues.

TASK A (5 marks)

Visually represent the scenario.


for answers, detailed explanations & 100+ student Sketches

edge.dqlabs.in | DQ Labs | 9591001000




TASK B (10 marks)

Suggest 2 solutions that address the issues.



Caption: _____



Caption: _____

for answers, detailed explanations & 100+ student Sketches

edge.dqlabs.in | DQ Labs | 9591001000



- Q14. Study the paragraph and the image given on the adjacent page carefully and share your understanding of the concepts expressed in both in form of a model that communicates a balance between both the text and the image.

Part A:

The history of the concept of Sarvodaya in the modern era begins with English social philosopher John Ruskin. In 1860, Ruskin wrote a series of essays that criticized the capitalist system because it created a hierarchical social structure, hyper-competitive culture, mechanical worldview, and undermined the dignity of labor. As an alternative, he suggested building economic systems that facilitate fair wages, meaningful work, and which would focus on enabling the least powerful, not the most. He published this collection of essays in 1862 as a book, entitled Unto This Last.

While Ruskin provided the framework for Sarvodaya philosophy, the term/concept was coined by, Gandhiji. It is a comprehensive, social, economic, political, moral and spiritual philosophy. It was based on three basic principles:

- 1. That the good of the individual is contained in the good of all.*
- 2. That a lawyer's work has the same value as the barber's in as much as all have the same right of earning their livelihood from their work.*
- 3. That is a life of labour, i.e., the life of the tiller of the soil and the handicraftsman is the life worth living.*

Mahatma Gandhi was of the firm view that the earth provides enough to satisfy every man's needs, but not for every man's greed. In the Sarvodaya society of his dream, therefore, every member will be free from any greed for limitless acquisition of material wealth and more and more luxurious living and they will follow the motto of simple living and high thinking. Everyone will, thus, get ample opportunity to produce and earn sufficiently through honest work for decent and dignified living. Consequently there will be no problem of unemployment. Of course, obviously, income of different people may be different, depending on their talent, ability and effort. But those who will earn more will use the bulk of their greater earnings for the good of the society as a whole. In such a society, all wealth, including land, will be assumed as common property to be utilized for the welfare of all. As regards use of machinery in economic activity, Gandhi said that "If we feel the need of machines, we certainly will have them. But there should be no place for machines that concentrate power in a few hands and turn the masses into mere machine-minders, if, indeed, they do not make them unemployed." In order, therefore, to minimize use of machines in a Sarvodaya society, Gandhi strongly advocated that everyone should do some productive physical work at least to earn his/her daily bread as was also advocated by Leo Tolstoy - the great Russian thinker and writer and everyone should uphold the dignity of labour irrespective of the type of honest labour performed by an individual.





Answer



for answers, detailed explanations & 100+ student Sketches

edge.dqlabs.in | DQ Labs | 9591001000



Part-II: Domain Specific Test

(Information Technology-Integrated Programmes)

for answers, detailed explanations & 100+ student Sketches

edge.dqlabs.in | DQ Labs | 9591001000



Questions 1 to 6 are of subjective type. Do not write your name anywhere in the booklet. This will lead to disqualification.

Q1. Construct 3 arguments for who should own the rights to the contents on a social media platform such as Facebook and Instagram, after a person (i.e. account holder) is deceased. What should happen to the deceased individual's account and its contents/assets? (15 marks)


1.

2.

3.



- Q2. Fed up with the menace of honking and corresponding noise pollution, the government has made it mandatory to install a 'smart horn' in every vehicle. Imagine and illustrate the concept of smart horn, which may be used in any one of the given cases: 2-wheelers or 4-wheelers or commercial vehicles. (15 marks)



for answers, detailed explanations & 100+ student Sketches

edge.dqlabs.in | DQ Labs | 9591001000



Briefly describe your concept in the space below.



for answers, detailed explanations & 100+ student Sketches

edge.dqlabs.in | DQ Labs | 9591001000

Q3. YouTube provides you with an opportunity to create your own online streaming channel. Select a specific topic or theme that you plan to launch (*e.g. cooking*) and give reasons for your choice. Give your channel an identity by designing a logo and tagline for your channel. (15 marks)

Tagline: _____

Reasons for choice of channel:



Questions 4 to 6 are of 10 marks each.

Q4. An elderly person wants to click a selfie using a smartphone and share it with their loved one. Imagine and illustrate a novel way of achieving the same task for this user group. (10 marks)



for answers, detailed explanations & 100+ student Sketches

edge.dqlabs.in | DQ Labs | 9591001000

Q5. Represent the event in the form of an info-graphic.

(10 marks)

"Over 50 people were killed and several injured Friday evening as two trains speeding in opposite directions mowed down people standing on the tracks near a railway crossing watching a Ravan effigy being burnt at a Dussehra celebration here.

There were at least 300 spectators at the Dhobi Ghat ground barely 2km from the Amritsar station. Many of them stood on the tracks close to the Juara Phatak crossing to get a better view and were taking videos of the burning Ravan as the first of the trains ran them over. The gates at the crossing were closed at the time.


It was only after the train had flashed past did the stunned survivors realize what had happened.

Most of the casualties appeared to be of those killed by the first train. The second train sped past seconds later and some of those who had jumped on the second set of tracks to escape the first were caught under it."

for answers, detailed explanations & 100+ student Sketches

edge.dqlabs.in | DQ Labs | 9591001000





for answers, detailed explanations & 100+ student Sketches

edge.dqlabs.in | **DQ Labs** | **9591001000**

Q6. Imagine a scenario in the near future where the citizens of India can vote using their smartphones. Describe three challenges you foresee in this mode of voting, and represent the solutions below. (10 marks)

1

2

3



Space for Rough Work

for answers, detailed explanations & 100+ student Sketches

edge.dqlabs.in | **DQ Labs** | **9591001000**



For more Detail Explanation and sample sketches
Log on to edge.dqlabs.in

Question No	Answer
1	B
2	Monochrome, Analogous
3	Ing, Jaguar, Lacosite, Puma
4	Pharmaceutical, Automobile, Food & Beverages, Telecommunication
5	Tomato, Lemon, Bitter gourd, Lady Finger
6	16
7	Ethiopia, Mexico, Bhutan, Russia
8	Madhya Pradesh, Maharashtra, Bihar, Tamil Nadu
9	C- 2, D-3, A- 1, B-4
10	Refer edge.dqlabs.in
11	Good Health& Well Being, Clean Water and Sanitation. Responsible, Gender Equality, Climate Action
12	Refer edge.dqlabs.in



for answers, detailed explanations & 100+ student Sketches

edge.dqlabs.in | DQ Labs | 9591001000

DQ Labs HALL OF FAME

NID



BARRI WAHLANG
NID PG 2020
RANK - 01



PRASHANT PRADHAN
NID PG 2020
RANK - 01



JAYA PRABHAKARAN
NID PG 2020
RANK - 01



PARVATHI
NID PG 2020
RANK - 01



MANASVINI
NID PG 2017
RANK - 01



KUSHAL SANDEEP
NID UG 2018
RANK - 03



LAXMI VIDYASAGAR
NID UG 2019
RANK - 04



DEVANSHI KAJANSHI
NID UG 2016
RANK - 04



RHEA ANGELA
NID UG 2018
RANK - 04



RAGHUL SREEDHAR
NID UG 2020
RANK - 05



TRISHA AMALERKAR
NID UG 2017
RANK - 05



TUSHAR SHIVAM
NID UG 2020
RANK - 05



CHANDRU
NID PG 2020
RANK - 06



SHUBHRA AGARWAL
NID UG 2020
RANK - 07



HARINI SURESH
NID UG 2020
RANK - 10



SHRIYA GURKHA
NID UG 2019
RANK - 10



POORNIMA S
NID UG 2017
RANK - 10



NIKITA DHAMIJA
NID UG 2020
RANK - 12



SUHANI CHHEDA
NID UG 2020
RANK - 14



ARUNDHATHI
NID UG 2020
RANK - 14



VRITTI MANGULLEY
NID UG 2019
RANK - 20



KOUSHIK RAM
NID PG 2020
RANK - 20



SAI VIDYASRI G
NID PG 2020
RANK - 19

for answers, detailed explanations & 100+ student Sketches

edge.dqlabs.in | DQ Labs | 9591001000



DQ Labs HALL OF FAME

UCEED



DARE LOBO
UCEED2017
RANK - 06



AMISHA NAIR
UCEED 2020
RANK - 8



CHERIAN JEREMIAH
UCEED 2018
RANK - 06




ZAID KHURAM
UCEED 2018
RANK - 14



MEDHAVI PARASAR
UCEED 2018
RANK - 15



SPOORTHI NAGESH
UCEED2018
RANK - 30



ARYAN VIJAY
UCEED 2020
RANK - 47



MADHAV G
UCEED2019
RANK - 50



UMANG SRIVASTA
UCEED2018
RANK - 63



SMIRTHI S
UCEED 2020
RANK - 64

NIFT RANKS



SIRIGOWRI
NIFT 2018
RANK - 01



DEEKSHITA RAMA
NIFT 2019
RANK - 03



SEEMRAN P
NIFT 2017
RANK - 07



JANANI
NIFT 2018
RANK - 10



SMRITHI S
NIFT 2020
RANK - 12



NIDHI L RAO
NIFT 2020
RANK - 27



RHEA MORAS
NIFT 2018
RANK - 35



HARINI SURESH
NIFT 2020
RANK - 41



ANMOL VENKATESH
NIFT 2018
RANK - 42



ANANYA JAIN
NIFT 2018
RANK - 46

for answers, detailed explanations & 100+ student Sketches

edge.dqlabs.in | DQ Labs | 9591001000



DQ Labs HALL OF FAME

KCET NATA RANKS



MRUDHULAA C R
KCET 2016
RANK - 1



POORNIMA S
NATA 2017
RANK - 2



PRASIDH S BAGAMANE
NATA 2020
RANK - 3




NEHA SARAH ABRAHAM
NATA 2016
RANK - 3



NIKITA BIJU THOMAS
NATA 2019
RANK - 4



DEVYANI RAMAMOORTHY
NATA 2016
RANK - 4



ANIRUDH RAMESH
NATA 2020
RANK - 5



RISHI KUMARAN
NATA 2016
RANK - 5



ANIRUDH SHANKAR
NATA 2020
RANK - 6



SUMUKH S
NATA 2016
RANK - 6



ANANYA VAIDYANATHAN
NATA 2020
RANK - 6



BHUMIKA P B
NATA 2018
RANK - 7



ULLAS M
NATA 2016
RANK - 7



DISHA DILIP
NATA 2020
NATA - 8



SWARNAVALLI
NATA 2018
NATA - 8



ADITHI BHANU PRAKASH
NATA 2020
RANK - 9



ADITYA KARIYA
NATA 2017
RANK - 9



SHASHANK SHANKAR
NATA 2018
RANK - 10



AISHWARYA P HEGDE
NATA 2016
RANK - 10



SAMYATHA S
NATA 2020
RANK - 11



CHARITHA N REDDY
NATA 2020
RANK - 12



MELANIE MARY
NATA 2016
RANK - 12



DISHA MUKHERJEE
NATA 2018
RANK - 13



for answers, detailed explanations & 100+ student Sketches

edge.dqlabs.in | DQ Labs | 9591001000

DQ Labs HALL OF FAME


NATA



PRAMITHA S S
NATA 2020
SCORE - 182.5



CHARITHA N REDDY
NATA 2020
SCORE - 177.5



ANIRUDH RAMESH
NATA 2020
SCORE - 172



NITYA MAHESHA
NATA 2020
SCORE - 171.5



PRANAV S KADAMBI
NATA 2020
SCORE - 171



POORNIMA S
NATA 2020
SCORE - 171



R GAURAV
NATA 2020
SCORE - 170.5



LAKSHMI
NATA 2020
SCORE - 170.5



ANANYA VAIDYANATHAN
NATA 2020
SCORE - 168.5



ANIKETH KRISHNAN
NATA 2020
SCORE - 168.5



DISHA DILIP
NATA 2020
SCORE - 168.5



SIMRITHA B S
NATA 2020
SCORE - 168



GANESH BS
NATA 2020
SCORE - 167



DISHA MUKHERJEE
NATA 2020
SCORE - 166



SNEHA S
NATA 2020
SCORE - 166



ADITHI BHANU PRAKASH
NATA 2020
SCORE - 165



SHREEJA PAGDALA
NATA 2020
SCORE - 165



SHRIYA SAPHER
NATA 2020
SCORE - 165



VAISHNAVI SURESH
NATA 2020
SCORE - 165



RAJAT KAPOOR
NATA 2020
SCORE - 164.5



RASHI BISHT
NATA 2020
SCORE - 163.5



SHRUTHI SUNDER
NATA 2020
SCORE - 163.5



ARPITHA PRASAD
NATA 2020
SCORE - 163



KAKARLA PUNEETHA
NATA 2020
SCORE - 163



for answers, detailed explanations & 100+ student Sketches

edge.dqlabs.in | DQ Labs | 9591001000